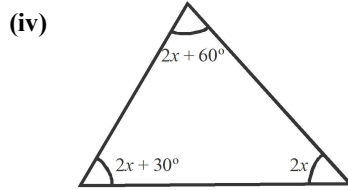
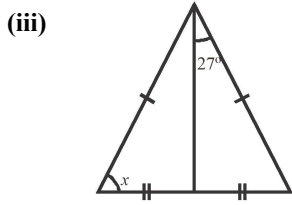
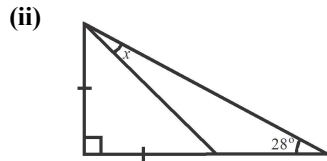
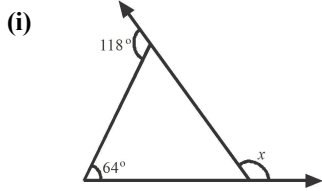


Time: 10 Minutes	Paper Math 7 (T-1)	Total Marks: 10
5th Month, 2nd Week, 1st Day	Exercise 4.3 Q # (1)	

☆ Answer the following questions: درج ذیل سوالات کے جواب دیں۔

Q.1. Find the unknown angles in the given figures. (2.5x5=10)

دی گئی اشکال میں سے نامعلوم زاویے معلوم کریں۔

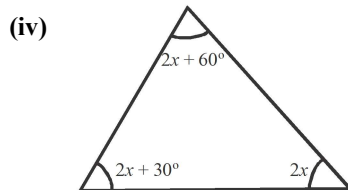
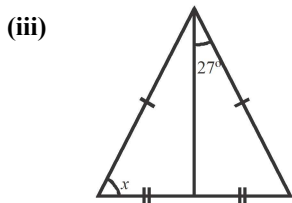
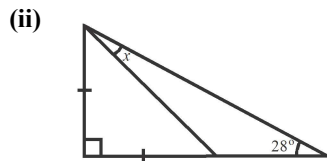
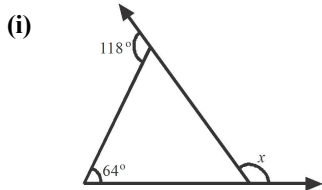


Time: 10 Minutes	Paper Math 7 (T-1)	Total Marks: 10
5th Month, 2nd Week, 1st Day	Exercise 4.3 Q # (1)	

☆ Answer the following questions: درج ذیل سوالات کے جواب دیں۔

Q.1. Find the unknown angles in the given figures. (2.5x5=10)

دی گئی اشکال میں سے نامعلوم زاویے معلوم کریں۔

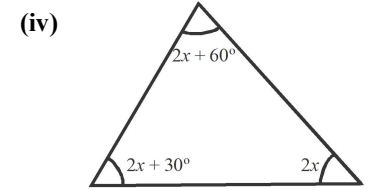
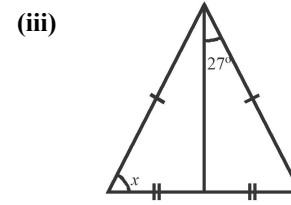
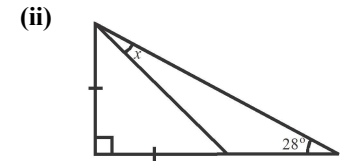
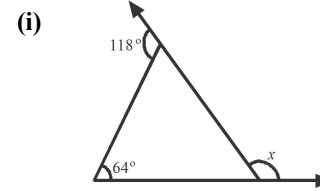


Time: 10 Minutes	Paper Math 7 (T-1)	Total Marks: 10
5th Month, 2nd Week, 1st Day	Exercise 4.3 Q # (1)	

☆ Answer the following questions: درج ذیل سوالات کے جواب دیں۔

Q.1. Find the unknown angles in the given figures. (2.5x5=10)

دی گئی اشکال میں سے نامعلوم زاویے معلوم کریں۔



Time: 10 Minutes	Paper Math 7 (T-1)	Total Marks: 10
5th Month, 2nd Week, 1st Day	Exercise 4.3 Q # (1)	

☆ Answer the following questions: درج ذیل سوالات کے جواب دیں۔

Q.1. Find the unknown angles in the given figures. (2.5x5=10)

دی گئی اشکال میں سے نامعلوم زاویے معلوم کریں۔

